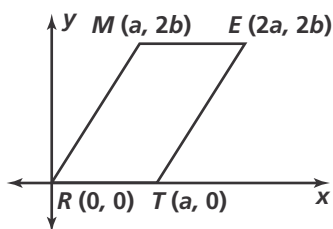


Practice 6-6

Placing Figures in the Coordinate Plane

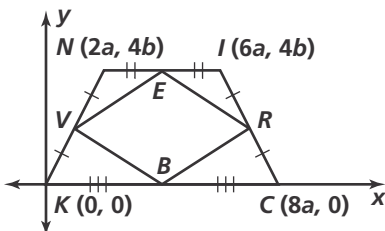
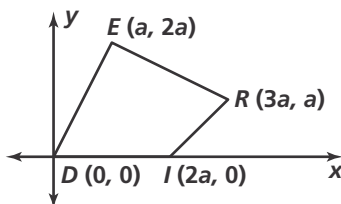
Find the coordinates of the midpoint of each segment and find the length of each segment.

1. \overline{ME}
2. \overline{ET}
3. \overline{TR}
4. \overline{RM}



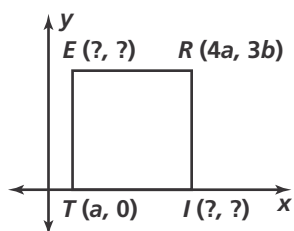
Find the slope of each segment.

5. \overline{DI}
6. \overline{IR}
7. \overline{RE}
8. \overline{DE}
9. \overline{VE}
10. \overline{ER}
11. \overline{RB}
12. \overline{VB}

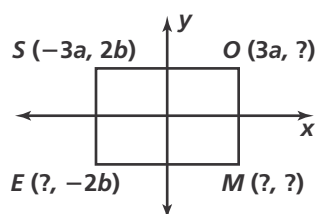


Use the properties of each figure to find the missing coordinates.

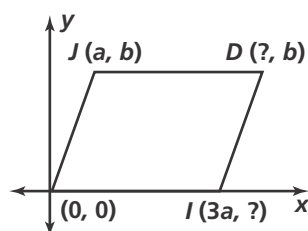
13. square



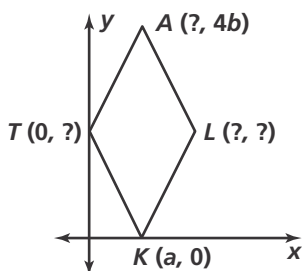
14. rectangle



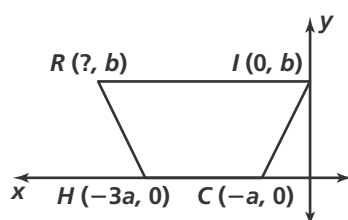
15. parallelogram



16. rhombus



17. isosceles trapezoid



18. kite

